

Money

Name: _____

1 Eva has these notes and coins.



How much money does she have?

£ and p

1 mark

2 Circle £4 and 65p.



1 mark

3 Max empties his money box.



He spends £1 and 72p on a present.

Circle the coins he could have used.



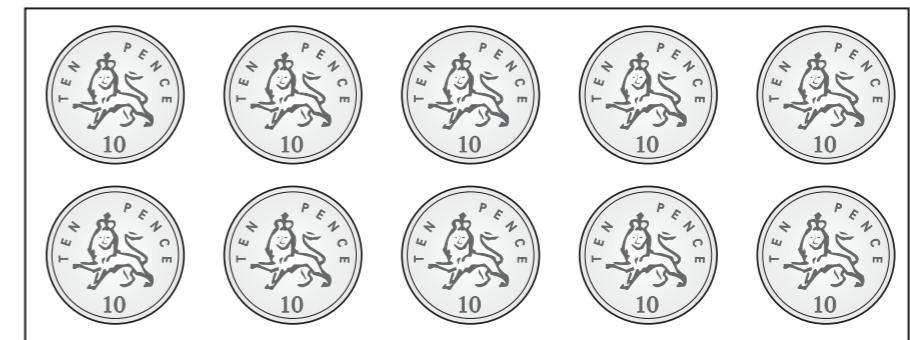
How much money does he have left?

£ and p

1 mark

1 mark

4 Tick the sets of coins that total £1



1 mark

5 How much money is there altogether?



£ and p

1 mark

6 Here is part of a menu.

Milkshake	£1 and 70p
Water	£1 and 25p
Hot chocolate	£2 and 45p
Flapjack	£1 and 29p
Brownie	75p

What is the total cost of a flapjack and a milkshake?

£ and p

1 mark

Whitney has £5 and 60p.

She buys a hot chocolate.

How much money does she have left? £ and p

1 mark

What is the total cost of a brownie and a water?

£ and p

1 mark

7 Complete the number sentences.

£1 and 36p = pence

£ and p = 512 pence

£8 = p

1 mark

1 mark

1 mark

8 Teddy buys a sandwich for £3 and 55p.
How much change will he get from £10?

£ and p

1 mark

9 Miss Rose buys a kettle and a toaster.

- The kettle costs twice as much as the toaster.
- The total cost is £63

How much does the kettle cost?

£

2 marks